

Name: _____

CHAPTER
18

Subtraction Stories

COMPLETE
DURING THE
WEEKS OF
JUNE
1-12

Lesson 1 Writing Subtraction Sentences and Representing Subtraction Stories

Count and write.




1



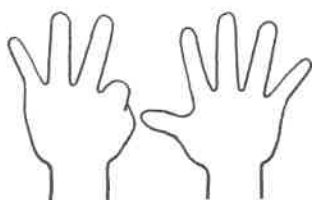
minus



is
equal
to





2



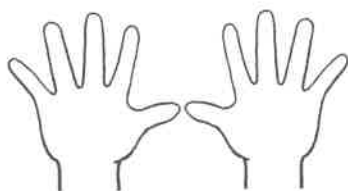
minus



is
equal
to





3



minus




is
equal
to



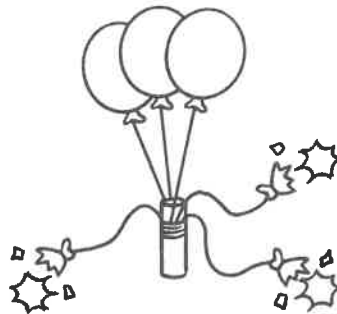
Name: _____

Count and write.


1



There are
6 balloons.



3 balloons
burst.




How many
are left?

2



There are
7 birds.



5 birds fly
away.




How many
are left?



Name: _____

Count and write. Then, tell a story.

1



2



Name: _____




Lesson 2 Comparing Sets

How many more? Write the number sentence.





1



How many more  ?



2

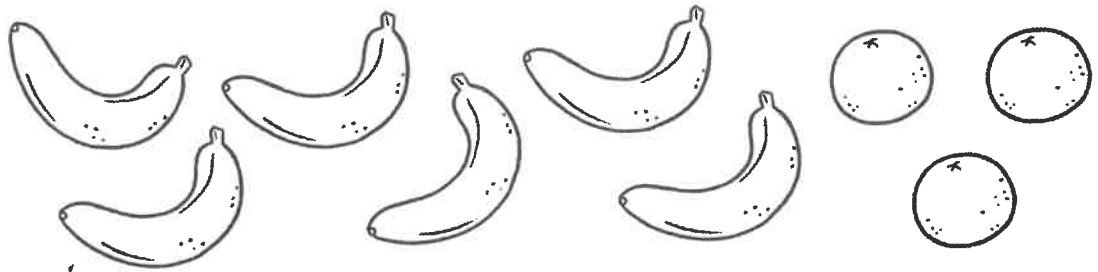


There are  more .

Name: _____


How many more? Write the number sentence.

1



There are _____ more .

2



There are _____ more .

Name: _____

Lesson 3 Subtraction Facts to 5

Count and write.



$3 - 1 = \underline{\quad\quad\quad}.$



$3 - 2 = \underline{\quad\quad\quad}.$



$5 - 0 = \underline{\quad\quad\quad}.$



$2 - 1 = \underline{\quad\quad\quad}.$



$4 - 2 = \underline{\quad\quad\quad}.$



$3 - 3 = \underline{\quad\quad\quad}.$




$4 - 1 = \underline{\quad\quad\quad}.$



Name: _____

Write the number sentence.

1



2



3

